

Mathematics

SAMPLES

HINT: Read each problem carefully.

Directions

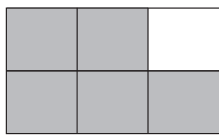
Choose the best answer to each question. If your answer is not given, mark “None of these.”

- A** Tanya had 35 comic books. She gave 7 comic books to a friend. How many did she have left?

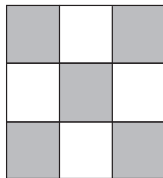
- (A) 42
- (B) 38
- (C) 32
- (D) 28
- (E) None of these

HINT: Look for key words and numbers to help solve each problem.

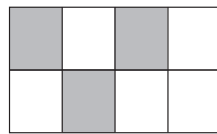
- B** Clem has to make a picture showing $\frac{5}{8}$. Which of these figures has $\frac{5}{8}$ shaded?



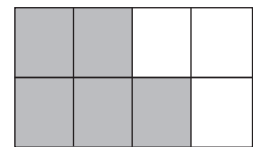
(F)



(G)



(H)



(J)

- C** There are 78 girls and 91 boys at a summer camp. Which numbers give the best estimate of the total number of children at the camp?

- (A) 70 + 90
- (B) 70 + 100
- (C) 80 + 90
- (D) 80 + 100

