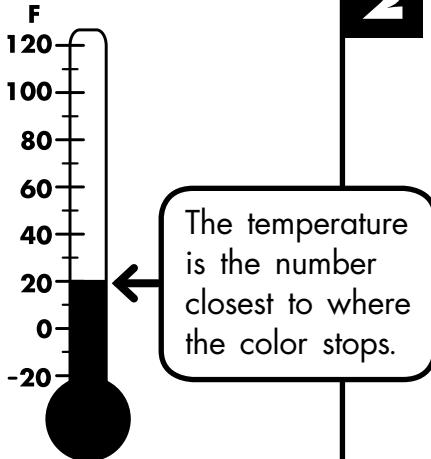
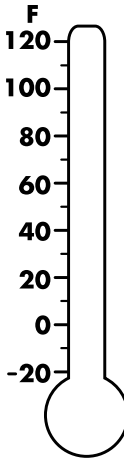
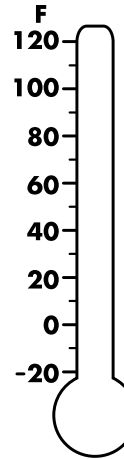
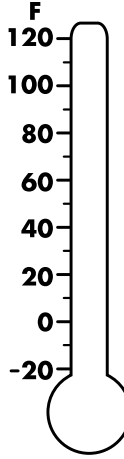
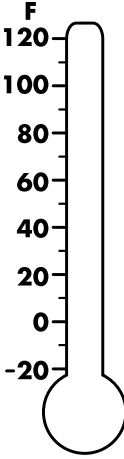
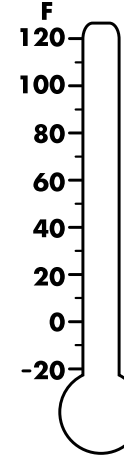


Name: _____

Reading a Thermometer

What's the Temperature?

A thermometer shows how hot or cold something is. Fill in each thermometer. We did the first one for you.

<p>1</p>  <p>20 degrees</p>	<p>2</p>  <p>40 degrees</p>	<p>3</p>  <p>60 degrees</p>
<p>4</p>  <p>70 degrees</p>	<p>5</p>  <p>90 degrees</p>	<p>6</p>  <p>120 degrees</p>



Which thermometer shows the coldest temperature?
How do you know?
(Write your answer on the back of this page.)