




Name: _____

Shark Sizes

Sharks come in all sizes! Read the list of shark lengths. Use it to draw bars on the graph to show how long each shark is. Then, color each bar using a different color.



Shark Type	Length
Great white shark	23 feet
Great hammerhead shark	20 feet
Whale shark	46 feet
Tiger shark	20 feet
Spiny dogfish shark	4 feet
Lemon shark	10 feet



Use your bar graph to answer these questions.

1. Which type of shark is longest? _____
2. Which two shark types are the same length? _____

3. How much longer is the lemon shark than the spiny dogfish shark?

© 2009 by Scholastic Inc. Teachers may make machine copies of this page to distribute to their students.