


Name: \_\_\_\_\_


# Clock Challenge

1. Draw the hands on each clock to show the time.


a) 11:00 a.m.




b) 2:30 p.m.



c) 7:15 a.m.



d) 4:45 p.m.



- What time was it 2 hours before 7:15 a.m.? \_\_\_\_\_
- How much time has gone by from 11:00 a.m. to 2:30 p.m.? \_\_\_\_\_
- How many minutes are there between 2:30 p.m. and 2:45 p.m.? \_\_\_\_\_
- Jack's soccer practice started at 4:45 p.m. He got there 15 minutes early. What time did Jack get to soccer practice? \_\_\_\_\_
- Amanda's alarm clock went off at 7:15 a.m. She hit the snooze button and got up 15 minutes later. But Amanda forgot to turn her clock back one hour for the end of daylight saving time. What time did Amanda actually wake up? \_\_\_\_\_

REPRODUCIBLE SKILLS PAGE

