






Name: _____

Cent Smart

Use the chart below to answer the questions that follow it.

| Money | |
|-----------------------------------|--|
| PENNY 1 cent 1¢ |  |
| DIME 10 cents 10¢ |  |
| NICKEL 5 cents 5¢ |  |
| QUARTER 25 cents 25¢ |  |



1. What is the value of these coins? _____



2. What has the same value as these coins? _____



- Ⓐ 50 nickels Ⓑ 5 dimes Ⓒ 25 dimes Ⓓ 5 nickels

3. Zach bought a bottle of water with these coins.



How much did the bottle of water cost that Zach bought? _____

4. Yoanna wants to buy a box of pencils. It costs \$1.25. She has the following coins in her pocket:



- a) How much money does she have? _____
b) How much more money does she need? _____