

# Max's Math Adventures

Take some time to solve the rhyme

Name: \_\_\_\_\_

Date: \_\_\_\_\_


## Farmer Fred's Counting Fun

In the pigpen there were 4.  
Farmer Fred put in 2 more.  
That's 6 pigs if you are  
Someone who is keeping score.

5 cows were looking really great.  
3 more soon came through the gate.  
They were not a minute late.  
How many cows? There are 8.

7 chickens feeling fine  
Were all standing in a line.  
With 2 more the total came to 9.  
Then they all began to dine.

At the end of the day  
We heard Fred say,  
"I added animals and took none away.  
With your help it seemed like play!"

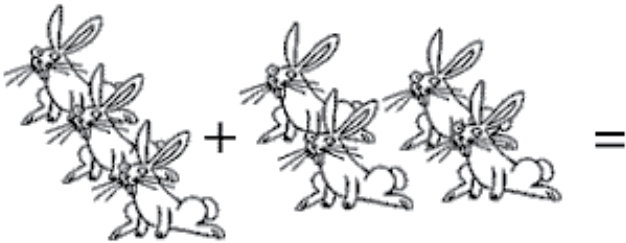


Ruthie and I and our friend Ed  
Went to visit farmer Fred.  
"I need your help to count," her said,  
"All the animals before the're fed."

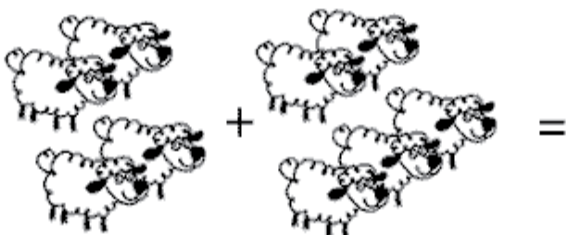
Help Ruthie and Max add the animals. Add and draw each type of animal below.



$1 + 2 = \underline{\quad}$



$3 + 4 = \underline{\quad}$



$4 + 5 = \underline{\quad}$

# Max's Math Adventures

Take some time to solve the rhyme


Name: \_\_\_\_\_

Date: \_\_\_\_\_

## Farmer Fred's Counting Fun

### Max's Challenge

Ruthie and I need your help adding some more of Farmer Fred's animals. Use page one for help with the problems below.



How many rabbits would Farmer Fred have if he started with 1 rabbit and added 2 more?

How many horses would Farmer Fred have if he started with 3 horses and added 4 more?

How many sheep would Farmer Fred have if he started with 4 sheep and added 5 more?