



78. Gizmo's factory was busy making automatic head scratchers. He made 110 on Monday. On Tuesday, he made 6 boxes of 90 each. On Wednesday, he packed them all into 5 crates. How many head scratchers went into each crate?




There were _____ head scratchers in each crate.

- 79.** Busy Brenda was painting her famous pickle sculptures for her stand at the county fair. She painted 500, but 60 broke on the ride over. She sold $\frac{2}{10}$ of what was left. How many pickle sculptures did she sell?



She sold _____ pickle sculptures.

80. Salami Elementary School bought this book. All of Grade 3 did all the problems. $\frac{1}{2}$ of Grade 4 did all the problems. All 80 5th graders did all the problems. There are the same number of 3rd graders and 4th graders in the school. There were 92 6th graders. The 5th grade has twice as many students as Grade 4. How many students did all the problems?



_____ students did all the problems.