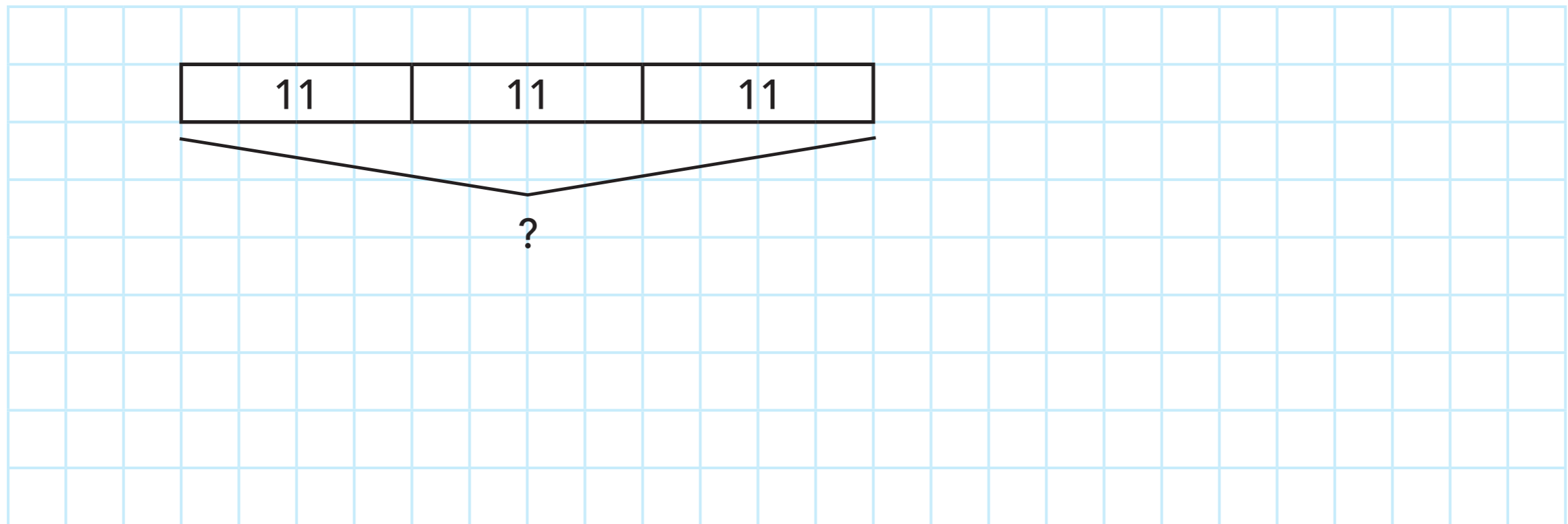



- 37.** The new lunch lady at Rotten Apple School made 11 lunches every day for the kindergartners. She did this every day for 3 days. Then she quit. How many lunches did she make in all?



$$11 + 11 + 11 = \underline{\quad\quad\quad} \quad \text{OR} \quad 3 \times 11 = \underline{\quad\quad\quad}$$

She made lunches in all.

38. There were 16 buses going to Camp Runamuck. Each bus has 4 tires and a spare tire. There were 32 happy campers on each bus. How many tires were there in total?




$$5 + 5 + 5 + 5 + 5 + 5 + 5 + 5 + 5 + 5 + 5 + 5 + 5 + 5 + 5 + 5 = \underline{\hspace{2cm}}$$

$$\text{OR } 16 \times 5 = \underline{\hspace{2cm}}$$

There were tires in total.

- 39.** Sal the Salamander Salesman sold 20 salamanders to each of his sisters. He has 7 sisters. How many salamanders did Sal sell in all?




$$20 + 20 + 20 + 20 + 20 + 20 + 20 = \underline{\hspace{2cm}}$$

$$\text{OR } 7 \times 20 = \underline{\hspace{2cm}}$$

Sal sold salamanders in all.

- 40.** Mrs. Teachalot had 24 students in her fourth grade class. She gave each student 6 avocado-shaped erasers at the beginning of the year. How many avocado-shaped erasers did she give out altogether?



$$24 + 24 + 24 + 24 + 24 + 24 = \underline{\hspace{2cm}} \quad \text{OR} \quad 6 \times 24 = \underline{\hspace{2cm}}$$

She gave out avocado-shaped erasers altogether.