
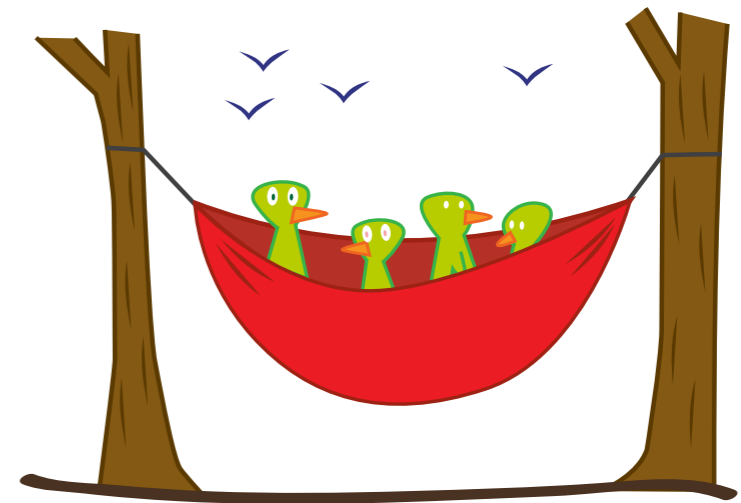


- 61.** 500 rare Pistachio Birds landed in Kevin's backyard. When his cat Manfred ran into the yard, only 0.5 of the birds flew away. The rest just sat in the hammock. How many Pistachio Birds flew away?



_____ Pistachio Birds flew away.

- 62.** Minky made some money selling tickets to see her dust-ball collection. She made \$550.12 on Monday. On Tuesday, she made \$25.18 more than Monday. How much money did she make altogether?

A large grid of 25 columns and 10 rows, intended for drawing a bar model to solve the problem.



Minky made \$ _____ altogether.

- 63.** Mad scientist Dr. Munchkin had 200 bongo beans, which make great Scientist Soup. He gave 0.4 of the beans to his helper Heinrich and the same to his helper Henrietta. How many bongo beans did he give away?

A large grid for drawing a bar model. The grid is 20 columns wide and 10 rows high, with light blue lines forming a grid of 200 small squares.

He gave away _____ bongo beans.

64. In 2009, Margarita's Taco Shop ordered 179.5 pounds of butterscotch chips for its famous Kitchen Sink Tacos. They ordered 35.5 pounds more than that in 2010. How many pounds did they order in total?



They ordered _____ pounds in total.